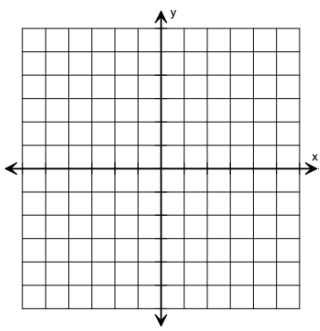
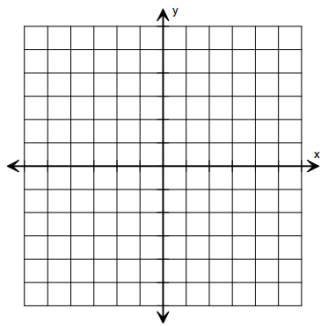


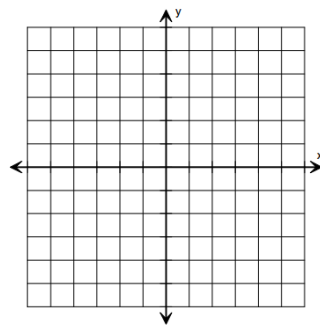
Example 1: $x - 3y < 9$



Example 2: $2x + 3y \leq -6$



Example 1: $x - 3y < 9$



Example 2: $2x + 3y \leq -6$

