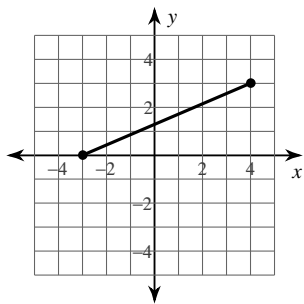


7.2 Homework

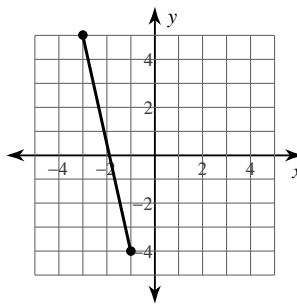
© 2015 Kuta Software LLC. All rights reserved.

Find the distance between each pair of points. Round your answer to the nearest tenth.

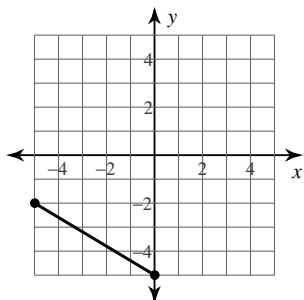
1)



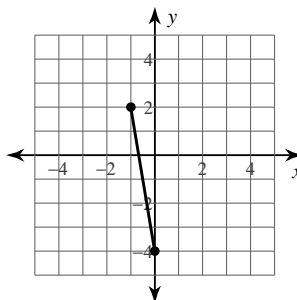
2)



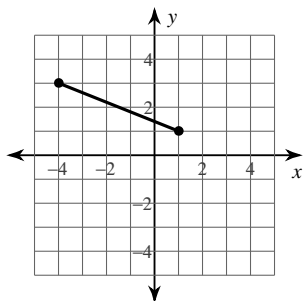
3)



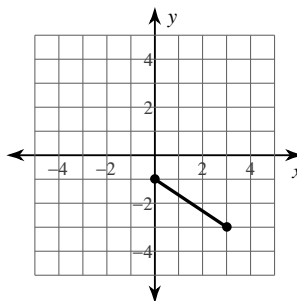
4)



5)



6)



7) $(-4, 4), (8, -4)$

8) $(-1, 9), (4, -9)$

9) $(-7, 6), (-7, 7)$

10) $(2, 8), (-7, 11)$

11) $(-11, 7), (-3, 12)$

12) $(6, 6), (-11, 7)$

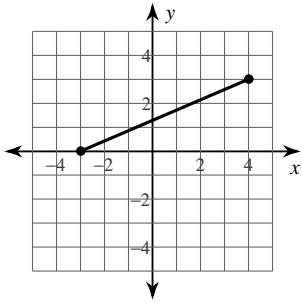
7.2 Homework

Date _____ Period _____

© 2015 Kuta Software LLC. All rights reserved.

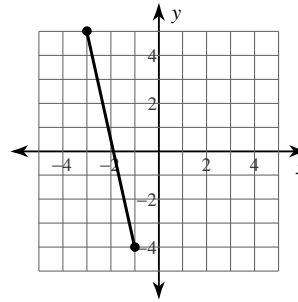
Find the distance between each pair of points. Round your answer to the nearest tenth.

1)



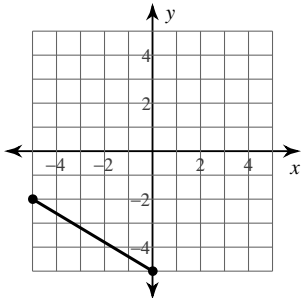
7.616

2)



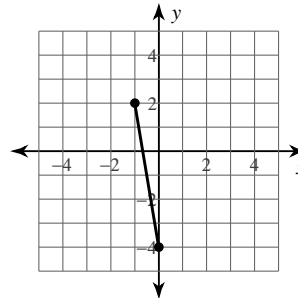
9.22

3)



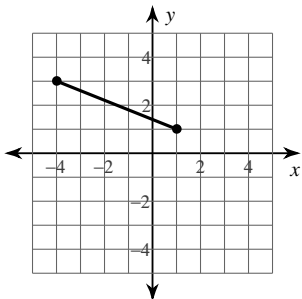
5.831

4)



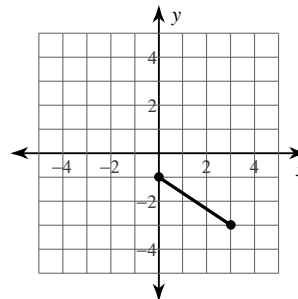
6.083

5)



5.385

6)



3.606

7) $(-4, 4), (8, -4)$

14.422

8) $(-1, 9), (4, -9)$

18.682

9) $(-7, 6), (-7, 7)$

1

10) $(2, 8), (-7, 11)$

9.487

11) $(-11, 7), (-3, 12)$

9.434

12) $(6, 6), (-11, 7)$

17.029