

## Algebra 1 Chapter 05 Review

### Multiple Choice

Identify the choice that best completes the statement or answers the question.

**Find the slope of the line that passes through the pair of points.**

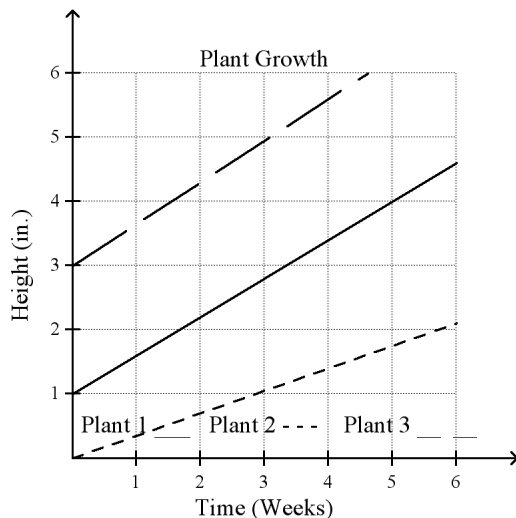
\_\_\_\_\_ 1. (1, 7), (10, 1)

- a.  $\frac{3}{2}$                       b.  $-\frac{2}{3}$                       c.  $-\frac{3}{2}$                       d.  $\frac{2}{3}$

\_\_\_\_\_ 2. A student finds the slope of the line between (14, 1) and (18, 17). She writes  $\frac{1-17}{18-14}$ . What mistake did she make?

- a. She should have added the values, not subtracted them.  
 b. She used  $y$ -values where she should have used  $x$ -values.  
 c. She mixed up the  $x$ - and  $y$ -values.  
 d. She did not keep the order of the points the same in the numerator and the denominator.

\_\_\_\_\_ 3.



Use the graph.

- a. Which plant was the tallest at the beginning?  
 b. Which plant had the greatest rate of change over the 6 weeks?

- a. plant 2; plant 2                      c. plant 3; plant 1  
 b. plant 1; plant 3                      d. plant 3; plant 3

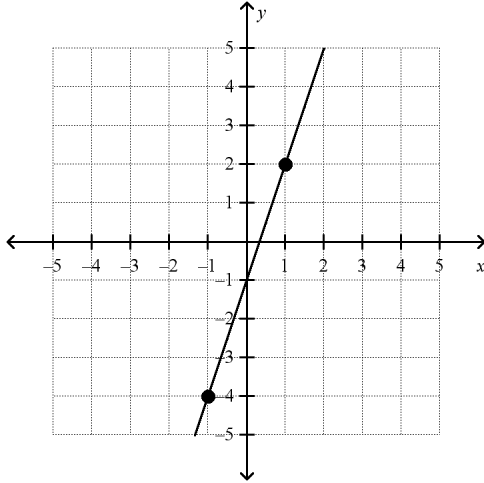
**Write an equation of a line with the given slope and  $y$ -intercept.**

\_\_\_\_\_ 4.  $m = 1$ ,  $b = 4$

- a.  $y = 4x + 1$                       c.  $y = -1x + 4$   
 b.  $y = x - 4$                       d.  $y = x + 4$

Write the slope-intercept form of the equation for the line.

\_\_\_\_\_ 5.



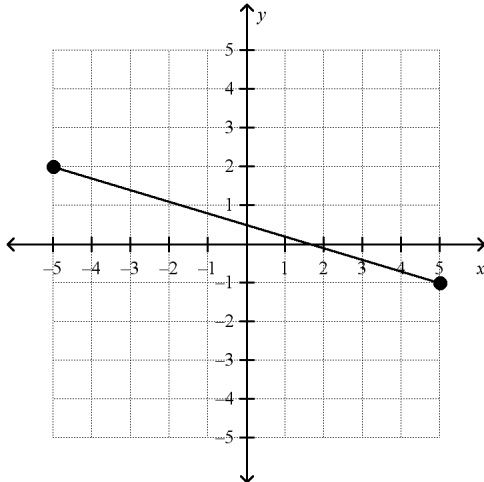
a.  $y = 3x - 1$

c.  $y = \frac{1}{3}x + 1$

b.  $y = -3x - 1$

d.  $y = \frac{1}{3}x - 1$

\_\_\_\_\_ 6.



a.  $y = -\frac{10}{3}x + \frac{1}{2}$

c.  $y = -\frac{3}{10}x + \frac{1}{2}$

b.  $y = \frac{3}{10}x + \frac{1}{2}$

d.  $y = \frac{1}{2}x + \frac{3}{10}$

\_\_\_\_\_ 7. Write an equation of a line that has the same slope as  $2x - 5y = 12$  and the same y-intercept as  $4y + 24 = 5x$ .

a.  $y = \frac{2}{5}x - 6$

c.  $y = \frac{5}{2}x - 6$

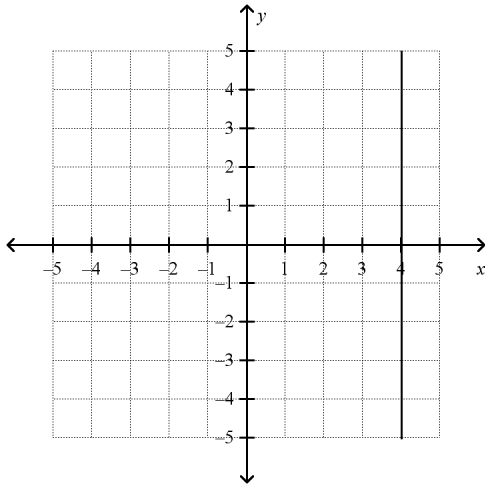
b.  $y = 6x - \frac{2}{5}$

d.  $y = \frac{1}{6}x - \frac{5}{2}$

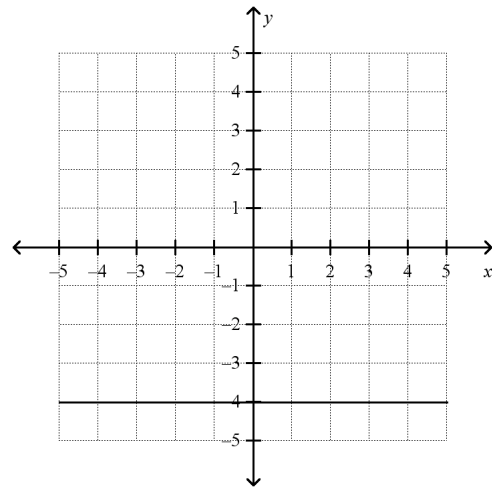
**Graph the equation.**

\_\_\_\_\_ 8.  $x = -4$

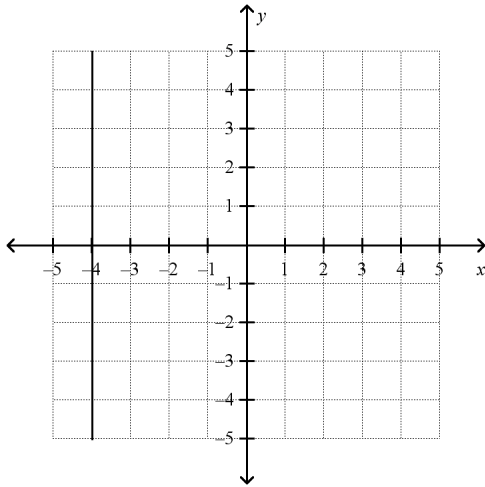
a.



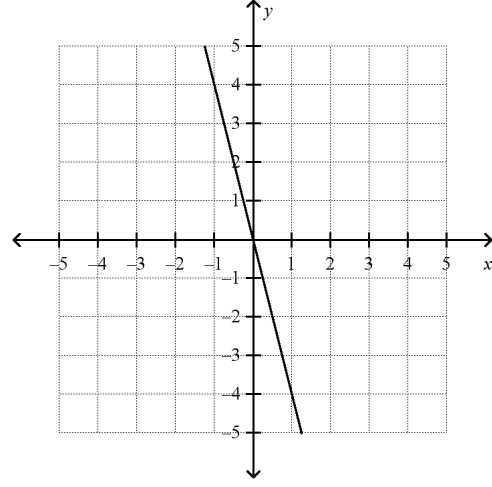
c.



b.



d.

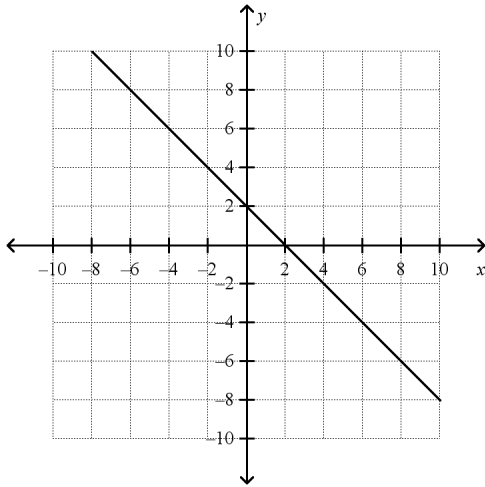


Name: \_\_\_\_\_

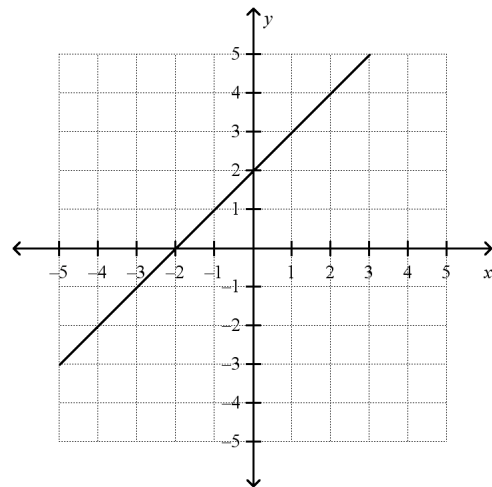
ID: A

\_\_\_\_\_ 9.  $y + 2 = -(x - 4)$

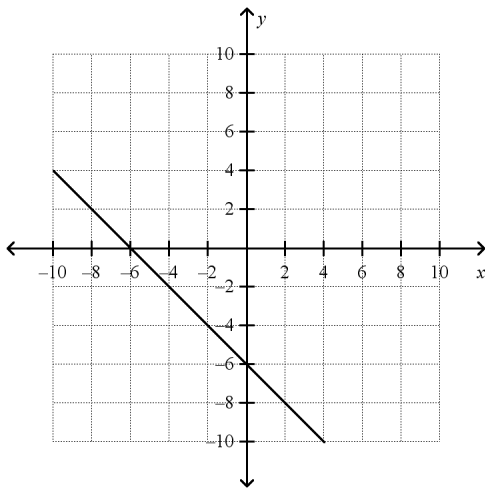
a.



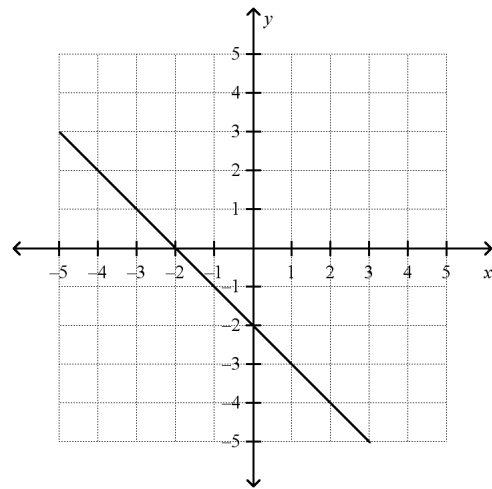
c.



b.

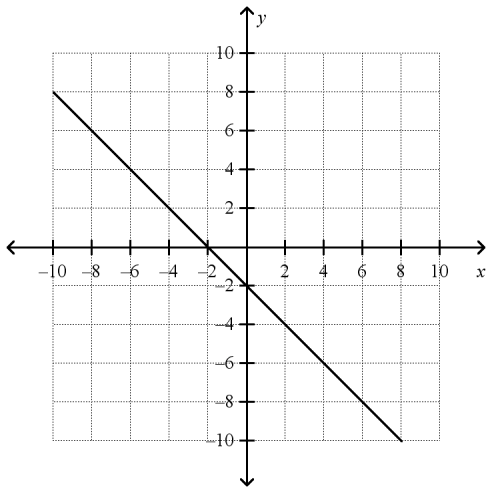


d.

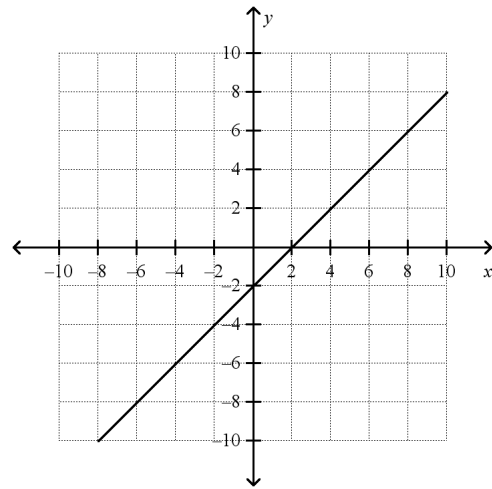


\_\_\_\_\_ 10.  $y - 3 = -(x + 5)$

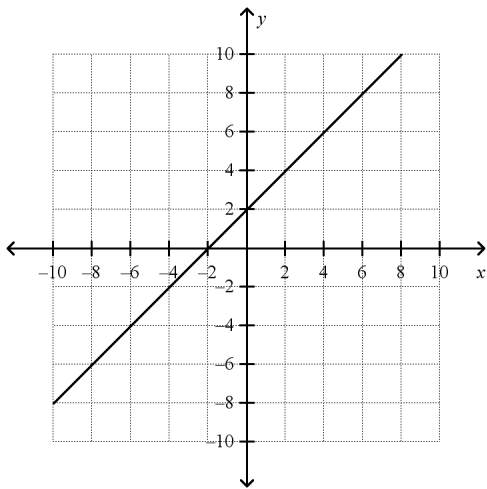
a.



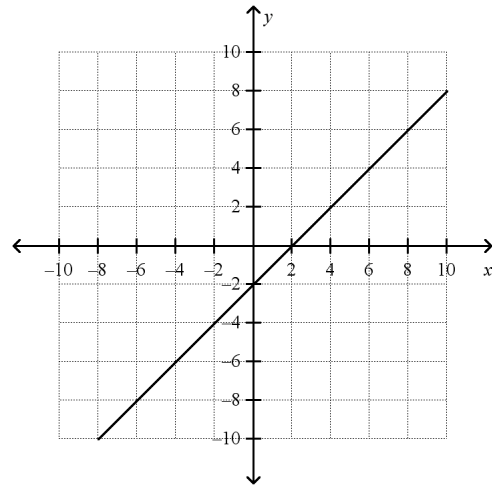
c.



b.



d.



**Write an equation in point-slope form for the line through the given point with the given slope.**

\_\_\_\_\_ 11.  $(4, -6); m = \frac{3}{5}$

a.  $y + 6 = \frac{3}{5}x - 4$

c.  $y + 6 = \frac{3}{5}(x - 4)$

b.  $y - 6 = \frac{3}{5}(x + 4)$

d.  $y - 4 = \frac{3}{5}(x + 6)$

\_\_\_\_\_ 12.  $(10, -9); m = -2$

a.  $y - 10 = -2(x + 9)$

c.  $y - 9 = -2(x - 10)$

b.  $y - 9 = -2(x + 10)$

d.  $y + 9 = -2(x - 10)$

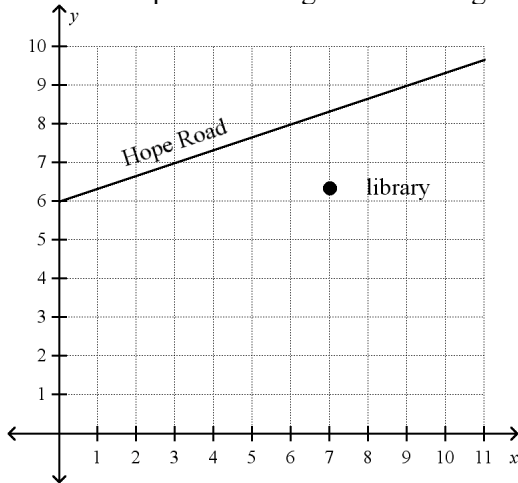
Are the graphs of the lines in the pair parallel? Explain.

\_\_\_\_\_ 13.  $y = \frac{1}{6}x + 8$

$$-2x + 12y = -11$$

- Yes, since the slopes are the same and the  $y$ -intercepts are the same.
- No, since the  $y$ -intercepts are different.
- Yes, since the slopes are the same and the  $y$ -intercepts are different.
- No, since the slopes are different.

- \_\_\_\_\_ 14. The map shows Hope Road and the construction site for the new library. Find the equation of a "street" that passes through the building site and is parallel to Hope Road.



- |                           |                            |
|---------------------------|----------------------------|
| a. $y = 3x + 4$           | c. $y = -\frac{1}{3}x + 4$ |
| b. $y = \frac{1}{3}x - 4$ | d. $y = \frac{1}{3}x + 4$  |

Write an equation for the line that is parallel to the given line and that passes through the given point.

\_\_\_\_\_ 15.  $y = -5x + 3$ ;  $(-6, 3)$

- |                   |                  |
|-------------------|------------------|
| a. $y = -5x + 27$ | c. $y = 5x - 9$  |
| b. $y = -5x - 27$ | d. $y = -5x + 9$ |

Tell whether the lines for each pair of equations are *parallel*, *perpendicular*, or *neither*.

\_\_\_\_\_ 16.  $7x - 4y = 4$   
 $x - 4y = 3$

- |                  |             |            |
|------------------|-------------|------------|
| a. perpendicular | b. parallel | c. neither |
|------------------|-------------|------------|

Write the equation of a line that is perpendicular to the given line and that passes through the given point.

\_\_\_\_\_ 17.  $4x - 12y = 2$ ;  $(10, -1)$

a.  $y = 3x + 29$

c.  $y = -3x + 29$

b.  $y = -\frac{1}{3}x + 29$

d.  $y = -\frac{1}{3}x + 7$

\_\_\_\_\_ 18.  $y = \frac{2}{3}x + 9$ ;  $(-6, 5)$

a.  $y = -\frac{2}{3}x + 1$

c.  $y = \frac{2}{3}x + 9$

b.  $y = -\frac{3}{2}x + \frac{3}{2}$

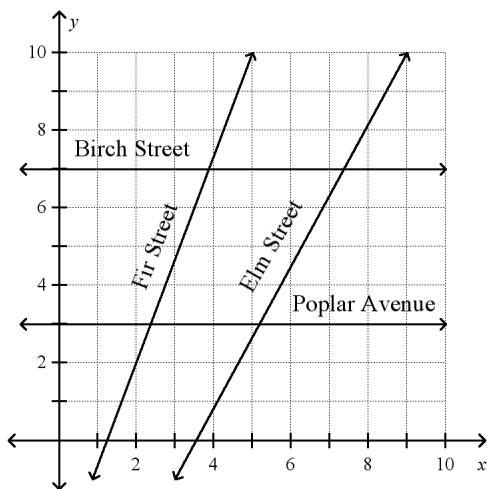
d.  $y = -\frac{3}{2}x - 4$

### Short Answer

19. Suppose you have \$20.00 to buy cold cuts for a class picnic. Ham costs \$3.99 per pound and turkey costs \$4.99 per pound. The equation  $3.99x + 4.99y = 20$  models this situation. What does the  $x$ -intercept of the graph of the equation tell you about the amount of meat you can buy?

### Essay

20. Write  $y = \frac{5}{3}x - 11$  in standard form. Show your work. Justify each step.
21. Use the map to answer the following. Show your work.



- What is the slope of the line representing Elm Street?
- Show that Birch Street and Poplar Avenue are parallel.
- Show that Fir Street is NOT perpendicular to Birch Street.

## Algebra 1 Chapter 05 Review Answer Section

### MULTIPLE CHOICE

1. ANS: B                   PTS: 1                   DIF: L2                   REF: 5-1 Rate of Change and Slope  
OBJ: 5-1.2 Finding Slope                   STA: CA A1 6.0 | CA A1 7.0 | CA A1 8.0  
TOP: 5-1 Example 4                   KEY: finding slope using points | slope
2. ANS: D                   PTS: 1                   DIF: L3                   REF: 5-1 Rate of Change and Slope  
OBJ: 5-1.2 Finding Slope                   STA: CA A1 6.0 | CA A1 7.0 | CA A1 8.0  
TOP: 5-1 Example 4                   KEY: slope | reasoning | error analysis
3. ANS: D                   PTS: 1                   DIF: L3                   REF: 5-1 Rate of Change and Slope  
OBJ: 5-1.1 Finding Rates of Change                   STA: CA A1 6.0 | CA A1 7.0 | CA A1 8.0  
TOP: 5-1 Example 2  
KEY: graphing | rate of change | problem solving | word problem | multi-part question
4. ANS: D                   PTS: 1                   DIF: L2                   REF: 5-2 Slope-Intercept Form  
OBJ: 5-2.1 Writing Linear Equations                   STA: CA A1 6.0 | CA A1 7.0  
TOP: 5-2 Example 2                   KEY: linear equation | slope | y-intercept
5. ANS: A                   PTS: 1                   DIF: L2                   REF: 5-2 Slope-Intercept Form  
OBJ: 5-2.1 Writing Linear Equations                   STA: CA A1 6.0 | CA A1 7.0  
TOP: 5-2 Example 3  
KEY: graphing | slope | y-intercept | slope-intercept form | finding slope using a graph
6. ANS: C                   PTS: 1                   DIF: L3                   REF: 5-2 Slope-Intercept Form  
OBJ: 5-2.1 Writing Linear Equations                   STA: CA A1 6.0 | CA A1 7.0  
TOP: 5-2 Example 3  
KEY: graphing | slope | y-intercept | slope-intercept form | finding slope using a graph
7. ANS: A                   PTS: 1                   DIF: L4                   REF: 5-3 Standard Form  
OBJ: 5-3.2 Writing Equations in Standard Form                   STA: CA A1 6.0  
KEY: standard form of a linear equation
8. ANS: B                   PTS: 1                   DIF: L2                   REF: 5-3 Standard Form  
OBJ: 5-3.1 Graphing Equations Using Intercepts                   STA: CA A1 6.0  
TOP: 5-3 Example 3                   KEY: graphing | horizontal and vertical lines
9. ANS: B                   PTS: 1                   DIF: L2  
REF: 5-4 Point-Slope Form and Writing Linear Equations                   OBJ: 5-4.1 Using Point-Slope Form  
STA: CA A1 6.0 | CA A1 7.0                   TOP: 5-4 Example 1  
KEY: point-slope form | graphing | linear equation
10. ANS: A                   PTS: 1                   DIF: L2  
REF: 5-4 Point-Slope Form and Writing Linear Equations                   OBJ: 5-4.1 Using Point-Slope Form  
STA: CA A1 6.0 | CA A1 7.0                   TOP: 5-4 Example 1  
KEY: point-slope form | graphing | linear equation
11. ANS: C                   PTS: 1                   DIF: L2  
REF: 5-4 Point-Slope Form and Writing Linear Equations                   OBJ: 5-4.1 Using Point-Slope Form  
STA: CA A1 6.0 | CA A1 7.0                   TOP: 5-4 Example 2  
KEY: slope-intercept form | linear equation



12. ANS: D                   PTS: 1                   DIF: L2  
 REF: 5-4 Point-Slope Form and Writing Linear Equations   OBJ: 5-4.1 Using Point-Slope Form  
 STA: CA A1 6.0 | CA A1 7.0                   TOP: 5-4 Example 2  
 KEY: slope-intercept form | linear equation
13. ANS: C                   PTS: 1                   DIF: L2  
 REF: 5-5 Parallel and Perpendicular Lines                   OBJ: 5-5.1 Parallel Lines  
 STA: CA A1 7.0 | CA A1 8.0                   TOP: 5-5 Example 1  
 KEY: parallel lines | slope
14. ANS: D                   PTS: 1                   DIF: L3  
 REF: 5-5 Parallel and Perpendicular Lines                   OBJ: 5-5.1 Parallel Lines  
 STA: CA A1 7.0 | CA A1 8.0                   TOP: 5-5 Example 2  
 KEY: parallel lines | problem solving | word problem
15. ANS: B                   PTS: 1                   DIF: L2  
 REF: 5-5 Parallel and Perpendicular Lines                   OBJ: 5-5.1 Parallel Lines  
 STA: CA A1 7.0 | CA A1 8.0                   TOP: 5-5 Example 2  
 KEY: parallel lines | linear equation
16. ANS: C                   PTS: 1                   DIF: L3  
 REF: 5-5 Parallel and Perpendicular Lines                   OBJ: 5-5.2 Perpendicular Lines  
 STA: CA A1 7.0 | CA A1 8.0                   TOP: 5-5 Example 3  
 KEY: perpendicular lines | parallel lines
17. ANS: C                   PTS: 1                   DIF: L2  
 REF: 5-5 Parallel and Perpendicular Lines                   OBJ: 5-5.2 Perpendicular Lines  
 STA: CA A1 7.0 | CA A1 8.0                   TOP: 5-5 Example 3  
 KEY: perpendicular lines | linear equation
18. ANS: D                   PTS: 1                   DIF: L2  
 REF: 5-5 Parallel and Perpendicular Lines                   OBJ: 5-5.2 Perpendicular Lines  
 STA: CA A1 7.0 | CA A1 8.0                   TOP: 5-5 Example 3  
 KEY: perpendicular lines | linear equation

**SHORT ANSWER**

19. ANS:  
 The  $x$ -intercept tell you the amount of ham you can buy if you do not buy any turkey.
- PTS: 1                   DIF: L3                   REF: 5-3 Standard Form  
 OBJ: 5-3.1 Graphing Equations Using Intercepts                   STA: CA A1 6.0  
 KEY: standard form of a linear equation |  $x$ -intercept |  $y$ -intercept | problem solving | word problem

## ESSAY

20. ANS:

[4]

$$y = \frac{5}{3}x - 11$$

$$3y = 3\left(\frac{5}{3}x - 11\right) \text{ Multiply each side by 3.}$$

$$3y = 5x - 33 \quad \text{Use the Distributive Property.}$$

$$-5x + 3y = -33 \quad \text{Subtract } 5x \text{ from each side.}$$

[3] correct steps with no justification OR one computational error

[2] more than one computational error

[1] more than one computational error and no justification

PTS: 1 DIF: L3 REF: 5-3 Standard Form

OBJ: 5-3.2 Writing Equations in Standard Form STA: CA A1 6.0

TOP: 5-3 Example 4

KEY: essay | transforming equations | rubric-based question | extended response

21. ANS:

[4]

a. Elm: (4,1), (8, 8);  $m = \frac{8-1}{8-4} = \frac{7}{4}$

b. Birch: (10, 7), (1, 7);  $m = \frac{7-7}{10-1} = \frac{0}{9} = 0$

Poplar: (10, 3), (1, 3);  $m = \frac{3-3}{10-1} = \frac{0}{9} = 0$

Birch Street and Poplar Avenue both have a slope of 0, so they are parallel.

c. Fir: (5, 10), (2, 2);  $m = \frac{10-2}{5-2} = \frac{8}{3}$

Birch has a slope of 0, so it is horizontal. To be perpendicular, Fir would have to be vertical, but it has a slope of  $\frac{8}{3}$  so it is not perpendicular to Birch.

[3] two parts correct

[2] one part correct with computational errors in the other parts OR missing explanations

[1] more than two computational errors OR one computation error and missing explanations

PTS: 1 DIF: L3 REF: 5-5 Parallel and Perpendicular Lines

OBJ: 5-5.2 Perpendicular Lines STA: CA A1 7.0 | CA A1 8.0

TOP: 5-5 Example 4

KEY: parallel lines | perpendicular lines | graphing | problem solving | word problem | extended response | rubric-based question